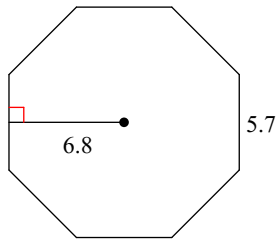


# Polygon Area

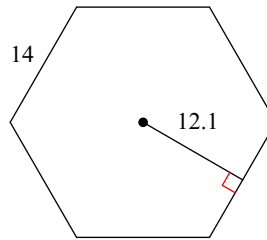
Date \_\_\_\_\_ Period \_\_\_\_\_

**Find the area of each regular polygon. Round your answer to the nearest tenth if necessary.**

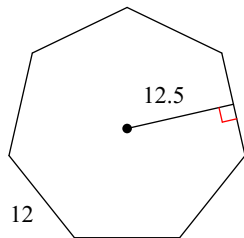
1)



2)

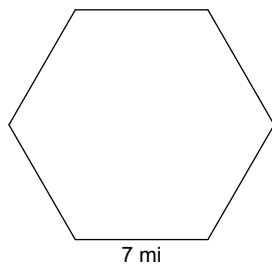


3)

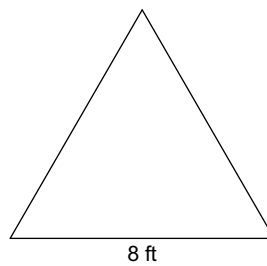


**Find the area of each figure. Round your answer to the nearest tenth.**

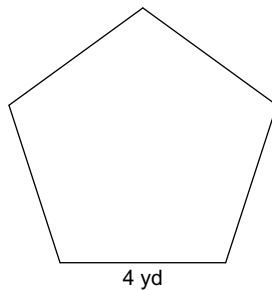
4)



5)



6)



7)

